

Please check the examination details below before entering your candidate information

Candidate surname

Other names

**Pearson Edexcel
International GCSE**

Centre Number

--	--	--	--	--

Candidate Number

--	--	--	--	--

Thursday 16 May 2019

Morning (Time: 1 hour 30 minutes)

Paper Reference **4PA1/02**

Pakistan Studies

**Paper 2: The landscape, people and economy of
Pakistan**

You do not need any other materials.

Total Marks

Instructions

- Use **black** ink or ball-point pen.
- **Fill in the boxes** at the top of this page with your name, centre number and candidate number.
- Answer **all** questions.
- Answer the questions in the spaces provided
– *there may be more space than you need.*

Information

- The total mark for this paper is 75.
- The marks for **each** question are shown in brackets
– *use this as a guide as to how much time to spend on each question.*

Advice

- Read each question carefully before you start to answer it.
- Try to answer every question.
- Check your answers if you have time at the end.

Turn over ►

P58993A

©2019 Pearson Education Ltd.

1/1/1/1/1



Pearson

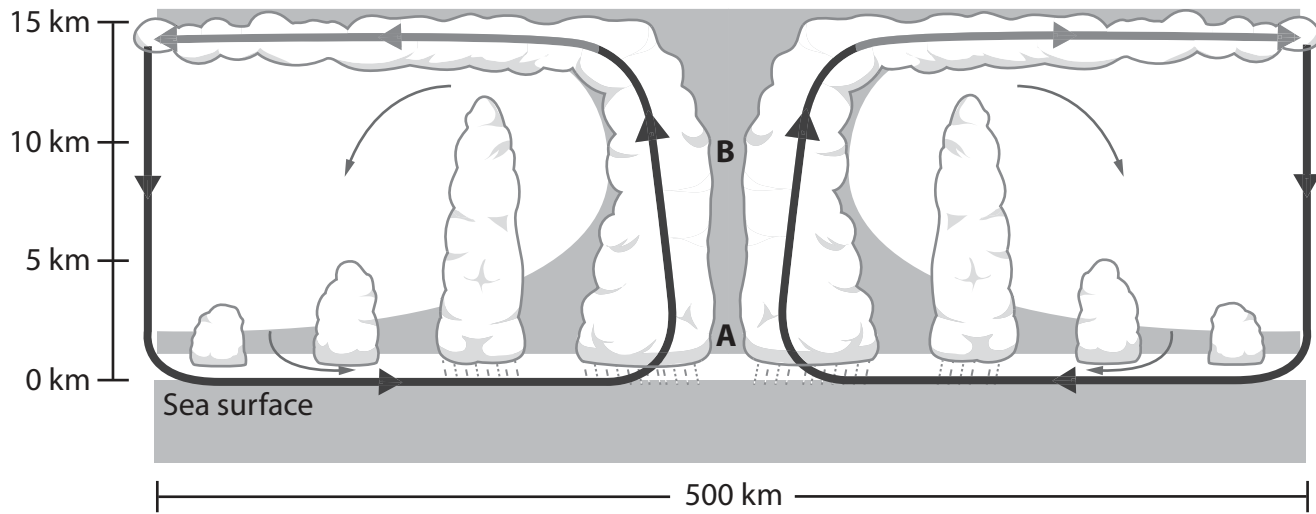
Some questions must be answered with a cross in a box ☒. If you change your mind about an answer, put a line through the box ☒ and then mark your new answer with a cross ☒.

SECTION A: The Physical Environment

Write your answers in the spaces provided.

You should aim to spend no more than 30 minutes on this section.

1 (a) Study Figure 1 which shows a cross section through a tropical cyclone.



Key	
	Warm air
	Cool air

Figure 1

(i) Identify feature A.

(1)

<input checked="" type="checkbox"/>	A Cloud bank
<input checked="" type="checkbox"/>	B Eye
<input checked="" type="checkbox"/>	C Converging air
<input checked="" type="checkbox"/>	D Sinking air

(ii) State **one** characteristic of a tropical cyclone found at B.

(1)



DO NOT WRITE IN THIS AREA

DO NOT WRITE IN THIS AREA

DO NOT WRITE IN THIS AREA

DO NOT WRITE IN THIS AREA

DO NOT WRITE IN THIS AREA

DO NOT WRITE IN THIS AREA

(b) State **two** factors that result in the formation of tropical cyclones.

(2)

1

2

(c) Explain **one** reason for the formation of the Indus Delta.

(3)

.....

.....

.....

.....

.....

.....

DO NOT WRITE IN THIS AREA

DO NOT WRITE IN THIS AREA

DO NOT WRITE IN THIS AREA

DO NOT WRITE IN THIS AREA

DO NOT WRITE IN THIS AREA

DO NOT WRITE IN THIS AREA



(d) Study Figure 2 which shows the Khurdopin Glacier in northern Pakistan, 2017.




Figure 2

Suggest **two** reasons for the occurrence of glacial ablation (melting) in Pakistan.

(4)

1

2

DO NOT WRITE IN THIS AREA

DO NOT WRITE IN THIS AREA

DO NOT WRITE IN THIS AREA

DO NOT WRITE IN THIS AREA

DO NOT WRITE IN THIS AREA

DO NOT WRITE IN THIS AREA



(e) Explain the processes leading to the formation of the Himalayan fold mountains.

(6)

Handwriting practice area consisting of 20 horizontal dotted lines for writing the answer.

DO NOT WRITE IN THIS AREA

DO NOT WRITE IN THIS AREA

DO NOT WRITE IN THIS AREA

DO NOT WRITE IN THIS AREA

DO NOT WRITE IN THIS AREA

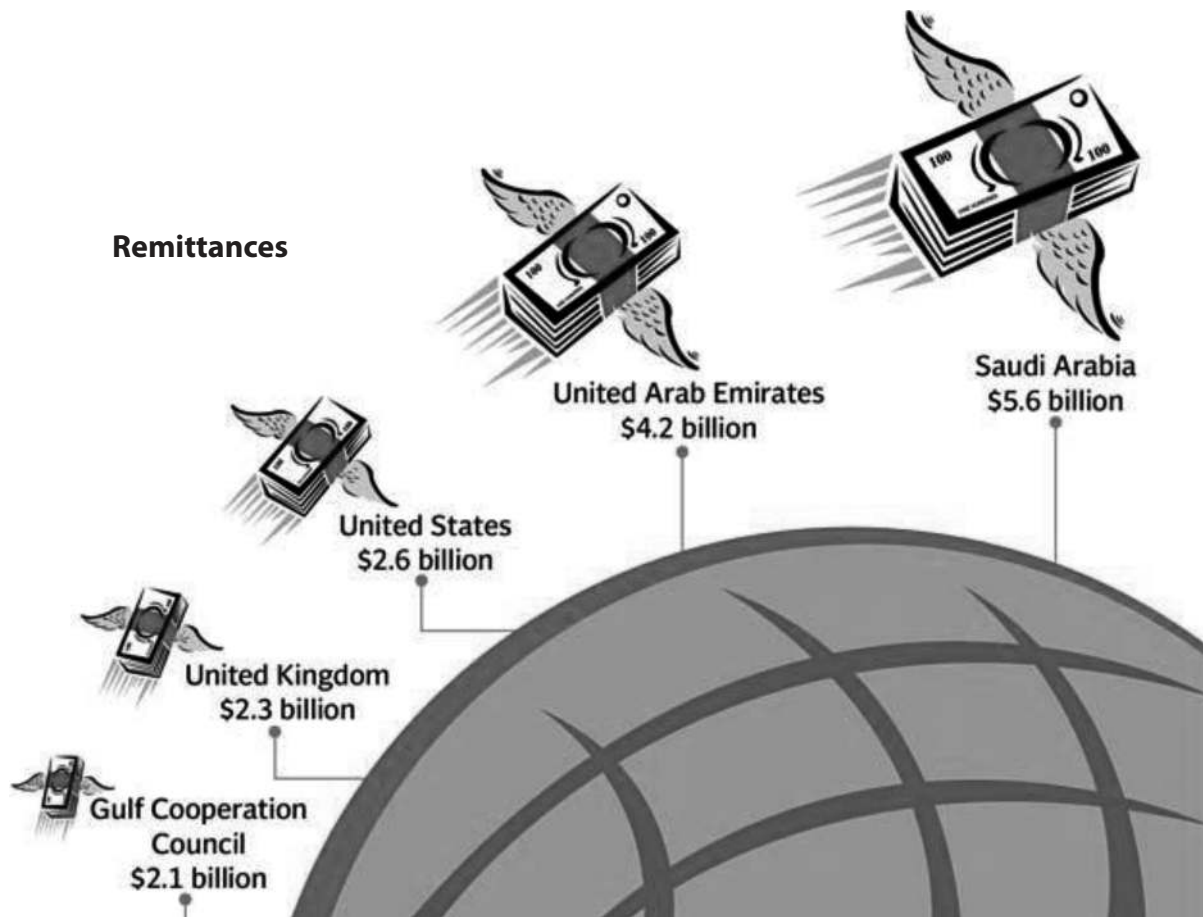
DO NOT WRITE IN THIS AREA



SECTION B: The Human Environment

You should aim to spend no more than 30 minutes on this section.

- 2 (a) Study Figure 3 which gives information about the value of remittances to Pakistan in 2015.



(Source: <https://tribune.com.pk/story/920286/pakistan-pockets-remittances-amounting-to-18-4b/>)

Figure 3

- (i) Identify the total value of remittances.

(1)

<input type="checkbox"/>	A \$18.8 billion
<input type="checkbox"/>	B \$17.8 billion
<input type="checkbox"/>	C \$16.8 billion
<input type="checkbox"/>	D \$15.8 billion



(ii) Define the term **remittances**.

(1)

.....

.....

(b) Name **two** of Pakistan's most important manufactured imports.

(2)

1

2

(c) Explain **one** approach to managing food security in Pakistan.

(3)

.....

.....

.....

.....

.....

.....

DO NOT WRITE IN THIS AREA

DO NOT WRITE IN THIS AREA

DO NOT WRITE IN THIS AREA

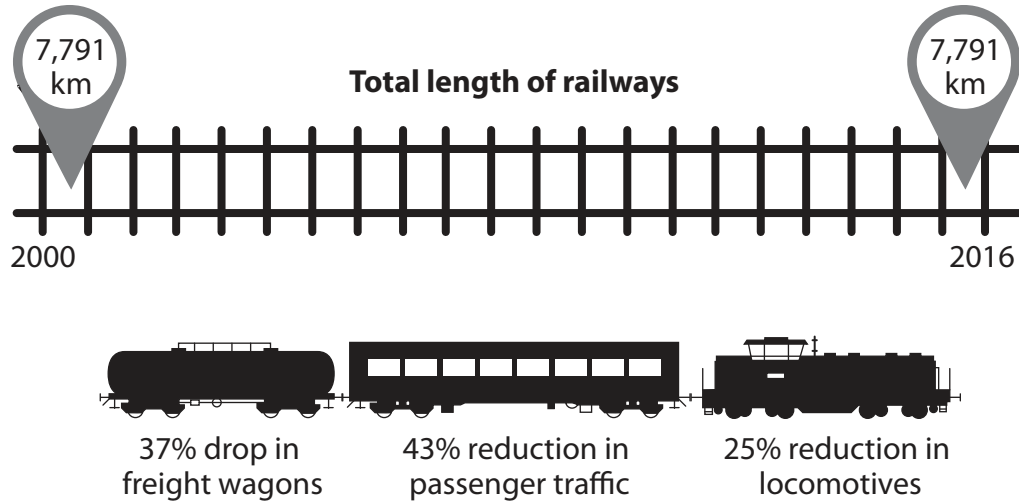
DO NOT WRITE IN THIS AREA

DO NOT WRITE IN THIS AREA

DO NOT WRITE IN THIS AREA



(d) Study Figure 4 which gives information about Pakistan's railways.



(Source: © MIT Technology Review Pakistan)

Figure 4

Suggest reasons for the reductions in:

1. passenger traffic
2. the number of freight wagons in the years 2000 to 2016.

(4)

passenger traffic

.....

.....

.....

.....

freight wagons

.....

.....

.....

.....



SECTION C: Challenges for Pakistan

Write your answers in the spaces provided.

You should aim to spend no more than 30 minutes on this section.

- 3 Study Figure 5 which shows trends in the Human Development Index (HDI) for three countries, 1980-2015.

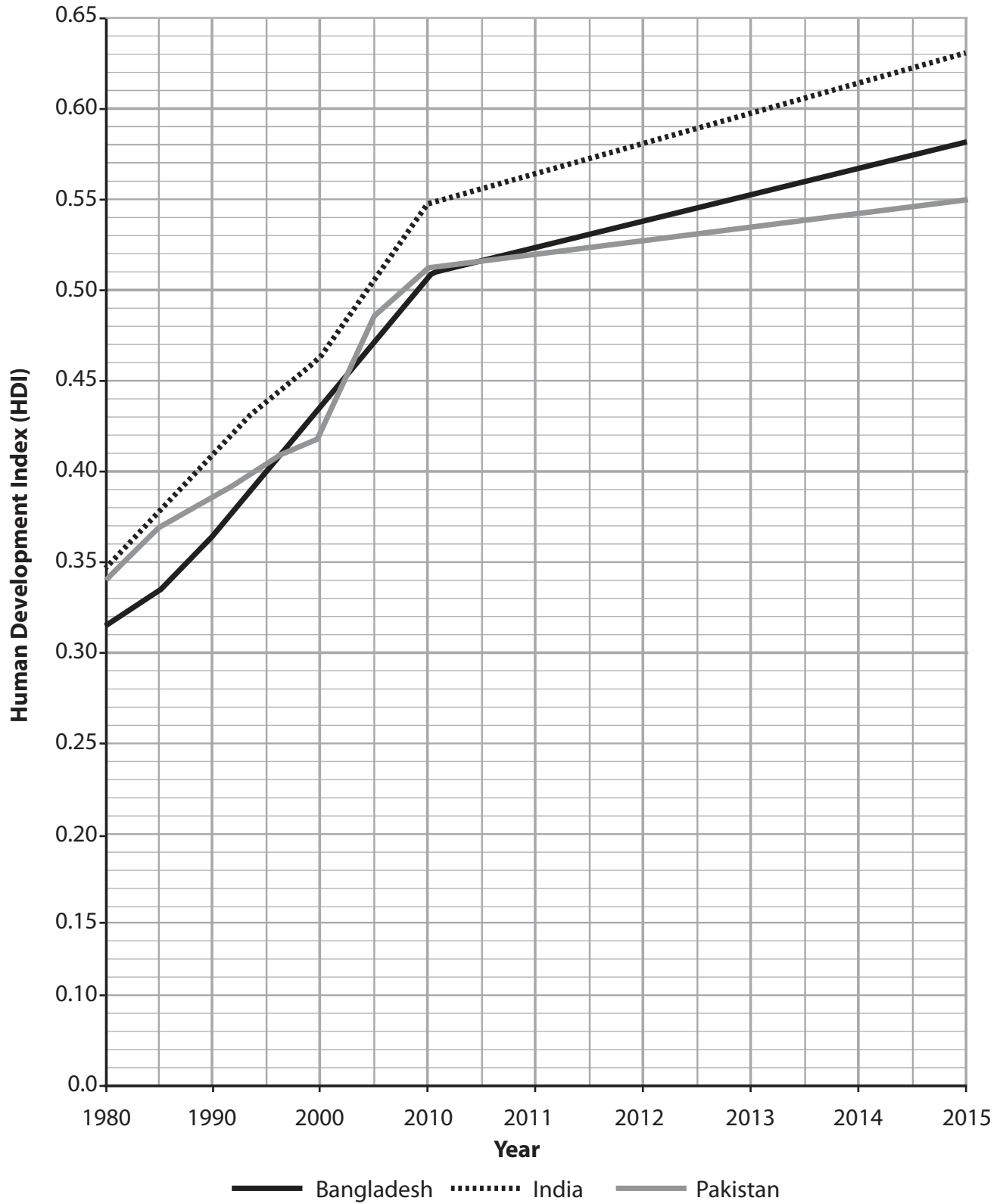


Figure 5

DO NOT WRITE IN THIS AREA

DO NOT WRITE IN THIS AREA

DO NOT WRITE IN THIS AREA

DO NOT WRITE IN THIS AREA

DO NOT WRITE IN THIS AREA

DO NOT WRITE IN THIS AREA



(a) (i) Identify the HDI value for Pakistan in 2000.

(1)

<input type="checkbox"/>	A 0.40
<input type="checkbox"/>	B 0.42
<input type="checkbox"/>	C 0.44
<input type="checkbox"/>	D 0.46

(ii) Calculate the difference in the HDI values for Pakistan and India in 2015.

(1)

.....

(iii) State **two** factors used in calculating HDI values.

(2)

1

2

(b) Explain **one** cause of recent global warming.

(3)

.....
.....
.....
.....
.....
.....



(c) Study Figure 6 which shows subsistence agriculture in a rural area of Pakistan.



(Source: © Xinhua / Alamy Stock Photo)

Figure 6

Suggest **two** reasons why subsistence agriculture creates challenges for rural communities in Pakistan.

(4)

1

2

DO NOT WRITE IN THIS AREA

DO NOT WRITE IN THIS AREA

DO NOT WRITE IN THIS AREA

DO NOT WRITE IN THIS AREA

DO NOT WRITE IN THIS AREA

DO NOT WRITE IN THIS AREA



TOTAL FOR SECTION C = 25 MARKS
TOTAL FOR QUESTION PAPER = 75 MARKS

DO NOT WRITE IN THIS AREA

DO NOT WRITE IN THIS AREA

DO NOT WRITE IN THIS AREA

DO NOT WRITE IN THIS AREA

DO NOT WRITE IN THIS AREA

DO NOT WRITE IN THIS AREA



P 5 8 9 9 3 A 0 1 7 2 0



DO NOT WRITE IN THIS AREA

DO NOT WRITE IN THIS AREA

DO NOT WRITE IN THIS AREA

DO NOT WRITE IN THIS AREA

DO NOT WRITE IN THIS AREA

DO NOT WRITE IN THIS AREA

BLANK PAGE



DO NOT WRITE IN THIS AREA

DO NOT WRITE IN THIS AREA

DO NOT WRITE IN THIS AREA

DO NOT WRITE IN THIS AREA

DO NOT WRITE IN THIS AREA

DO NOT WRITE IN THIS AREA

BLANK PAGE



P 5 8 9 9 3 A 0 1 9 2 0

DO NOT WRITE IN THIS AREA

DO NOT WRITE IN THIS AREA

DO NOT WRITE IN THIS AREA

BLANK PAGE

Pearson Education Ltd. gratefully acknowledges all the following sources used in the preparation of this paper:

Figure 1 - Source from: www.international.gc.ca/cil-cai/assets/images/cil-cai/images/maps-cartes/eng/bd.gif

Figure 2 - Source from: <https://en.wikipedia.org/wiki/Glaciology>

Figure 5 - Source from: <http://hdr.undp.org/sites/default/files/Country-Profiles/PAK.pdf>

Every effort has been made to contact copyright holders to obtain their permission for the use of copyright material. Pearson Education Ltd. will, if notified, be happy to rectify any errors or omissions and include any such rectifications in future editions.

